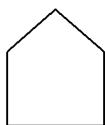
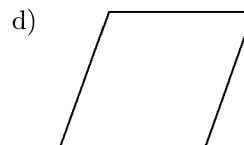
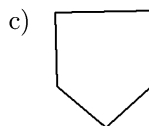
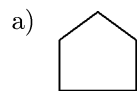


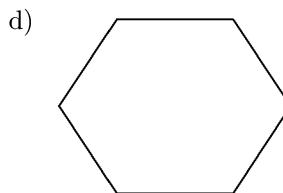

1. Look at the shape below.



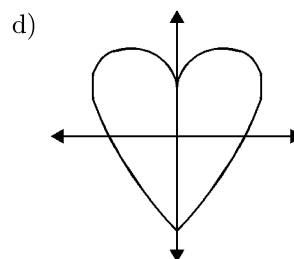
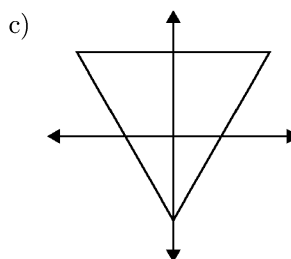
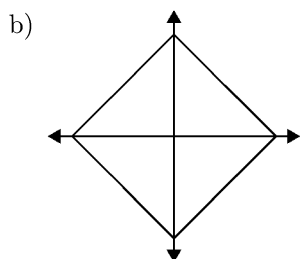
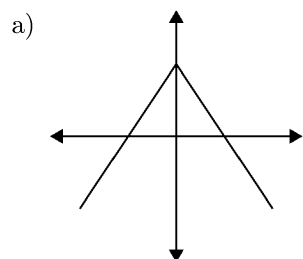
Which shape is congruent to this shape?



2. Victor tried to draw a line of symmetry through each of the 4 figures below. He quickly found out that only one of the figures has a line of symmetry. Which figure below has a line of symmetry?



3. Which picture shows 2 lines of symmetry?



Untitled 4/5/2010

1.

Answer: c

CodePath: EAS.CX4.3.9.9A.5

2.

Answer: d

CodePath: EAS.CX4.3.9.9C.1

3.

Answer: b

CodePath: EAS.CX4.3.9.9C.4